

NATIONAL EDUCATIONAL ASSESMENT AND EXAMINATIONS AGENCY (NEAEA)
ETHIOPIAN UNIVERSITY ENTRANCE EXAMINATION (EUEE)
CHEMISTRY EXAMINATION 2005

BOOKLET CODE: 00

NUMBER OF ITEMS:

SUBJECT CODE: 00

TIME ALLOWED: 00

PHYSICAL CONSTANTS

- a) Mass of electron = 9.11×10^{-31} kg
 b) Gas constant, $R = 8.314 \text{ J mol}^{-1} \text{ K}^{-1} = 0.0821 \text{ L atm mol}^{-1} \text{ K}^{-1}$
 c) Avogadro's number = $6.023 \times 10^{23} \text{ mol}^{-1}$
 d) Plank's constant, $h = 6.626 \times 10^{-34} \text{ J s/photon}$
 e) Faraday's constant, $F = 9.65 \times 10^4 \text{ C mol}^{-1}$
 f) Rydberg's constant, $R_H = 109,678 \text{ cm}^{-1}$
 g) Velocity of light, $c = 3 \times 10^8 \text{ ms}^{-1}$

ATOMIC NUMBERS (Z) AND ATOMIC WEIGHTS (A)

Element	H	He	Li	Be	B	C	N	O	F
Z	1	2	3	4	5	6	7	8	9
A	1.0	4.0	6.9	9.01	10.8	12.0	14.0	16.0	19.0

Element	Ne	Na	Mg	Al	P	S	Cl	Ar	K
Z	10	11	12	13	15	16	17	18	19
A	20.2	23.0	24.3	26.98	31.0	32.1	35.5	39.95	39.09

Element	Ca	Mn	Fe	Cu	Zn	Br	Kr	I
Z	20	25	26	29	30	35	36	80
A	40.08	54.9	55.9	63.55	65.38	79.90	83.80	200.6

1. Which of the following is NOT a basic SI unit? Not Answered

- A. Candela
 B. Gram ✓
 C. Mole
 D. Second

2. Which of the following statements is TRUE? Not Answered

- A. Ultraviolet light has longer wavelength than visible light.
- B. The energy of radiation decreases as the wavelength decreases.
- C. The frequency of radiation increases as the wavelength decreases. ✓
- D. Wave number of an electromagnetic radiation increases as wavelength increases.

3. Which of the following ionic compounds is formed from the reaction between magnesium and nitrogen?

Not Answered

- A. MgN_2
- B. Mg_2N_2
- C. Mg_3N_2 ✓
- D. Mg_2N_3

4. Which of the following molecules represents a non-polar covalent bond? Not Answered

- A. B-Cl
- B. C-Cl
- C. Cl-Cl ✓
- D. Mg-Cl

5. Which of the following groups in the periodic table has paramagnetic atoms? Not Answered

- A. Group zero
- B. Group IIA
- C. Group IIB
- D. Group IVA ✓

6. How many types of cubic unit cells are known? Not Answered

- A. 2
- B. 3 ✓
- C. 4
- D. 5

7. What is the process that converts liquid vegetable oils to solid fats? Not Answered

- A. Hydration
- B. Hydrogenation ✓
- C. Hydrolysis
- D. Saponification

8. What would be the solubility of $HOCH_2(CH_2)_6CH_2OH$ compared to $CH_3(CH_2)_6CH_2OH$? Not Answered

- A. Less soluble in water
- B. More soluble in water ✓
- C. The same solubility in water.
- D. More soluble in a non-polar solvent such as dichloroethane.

9. Which of the following gases is manufactured using the Haber process? Not Answered

- A. Ammonia ✓
- B. Nitric oxide
- C. Nitrogen
- D. Nitrogen dioxide

10. Which one of the mixture of the following pairs will NOT give a buffer solution? Not Answered

- A. HCN and NaCN
- B. NH_3 and NH_4Cl
- C. H_3PO_4 and KH_2PO_4
- D. HNO_3 and NaNO_3 ✓

11. Which one of the following is TRUE for salts formed from strong acids and strong bases? Not Answered

- A. No hydrolysis takes place. ✓
- B. Produces ions that are proton donors.
- C. Produces ions which are proton acceptors.
- D. Depends on the pK_a and pK_b of the parent acids and bases, respectively.

12. Which of the following metals is NOT obtained by commercial electrolytic process? Not Answered

- A. Ag ✓
- B. Al
- C. Cu
- D. Na

13. Which of the following metals has the highest electrical and thermal conductivities? Not Answered

- A. Ag ✓
- B. Co
- C. Cu
- D. Ni

14. Enthalpy is defined as the heat content of the system at constant: Not Answered

- A. Heat
- B. Moles
- C. Pressure ✓
- D. Volume

15. Which of the following elements is the second most abundant element in the earth's crust? Not Answered

- A. Aluminium
- B. Iron
- C. Oxygen

D. Silicon ✓

16. Which of the following plant nutrient will be produced as a result of nitrogen fixation? Not Answered

A. Carbohydrate

B. Cellulose

C. Mineral ✓

D. Protein

17. What is the number of significant figures in 0.0030050? Not Answered

A. 4

B. 5 ✓

C. 7

D. 8

18. Which of the following properties of a substance does NOT represent an intensive physical property?

Not Answered

A. Boiling point

B. Colour

C. Density

D. Volume ✓

19. What is the mass of one molecule of water? Not Answered

A. 3.0×10^{-23} g ✓

B. 1.8×10^{-23} g

C. 0.0003g

D. 18.0g

20. Which of the following quantum number (s) is (are) related to the size and energy of an electron in a hydrogen atom? Not Answered

A. n ✓

B. n,l

C. n,l,m

D. n,l,m,s

21. An electron has a spin quantum number, $s = +1/2$ and a magnetic quantum number, $m_l = +1$. In which of the following orbital will it NOT be present? Not Answered

A. S-orbital ✓

B. P-orbital

C. d-orbital

D. f-orbital

22. Which of the following molecules has a trigonal bi pyramidal structure? Not Answered

- A. PCl_5 ✓
- B. IF_5
- C. ICl_4^-
- D. BrF_5

23. Which of the following represents the general configuration of the transition elements? Not Answered

- A. ns^2np^6
- B. $ns(n-1)d$ ✓
- C. $ns(n-2)f$
- D. $ns^2np^6(n-1)d^{10}$

24. The total number of electrons participating in the bond formation of carbonate anion, CO_3^{2-} in the molecule of carbonic acid are: Not Answered

- A. 16
- B. 10
- C. 8 ✓
- D. 5

25. Which of the following crystals possess high electrical and thermal conductivities? Not Answered

- A. Ionic crystals
- B. Metallic crystals ✓
- C. Molecular crystals
- D. Covalent network crystals

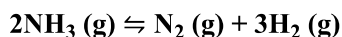
26. What is the valid rate expression for the following reaction? $2\text{NO} + 2\text{H}_2 \rightarrow \text{N}_2 + 2\text{H}_2\text{O}$ Not Answered

- A. $1/2 \frac{d[\text{H}_2]}{dt}$
- B. $-1/2 \frac{d[\text{H}_2\text{O}]}{dt}$
- C. $-1/2 \frac{d[\text{NO}]}{dt}$ ✓
- D. $\frac{d[\text{N}_2]}{dt}$

27. Which of the following statements is TRUE about equilibrium reaction? Not Answered

- A. No more reactants are transformed into products.
- B. There are equal amounts of reactants and products.
- C. The rate constant for the forward reactions equals that of the reverse reaction.
- D. The rate for the forward reactions equals that of the reverse reactions. ✓

28. Three gases are in equilibrium in a closed chamber sealed with a piston. The following equilibrium is established:



What will happen if the piston is pushed into the chamber? Not Answered

- A. The mole fraction of N_2 increases.
- B. The mole of N_2 decreases. ✓

- C. The mole fraction of N_2 remains the same.
- D. The mole fraction of N_2 increases and then decreases.

29. Which of the following reactions will produce an alkyl carboxylic acid? Not Answered

- A. Heating a methyl ketone with acid and iodine.
- B. Reacting an alkyl halide with hydrogen gas and platinum.
- C. Reacting an alcohol with ozone.
- D. Oxidation of a primary alcohol with hot permanganate or chromate. ✓

30. Which of the following statements is NOT TRUE? Not Answered

- A. Naturally derived soaps consists of a soluble salt of a long chain fatty acid.
- B. Triacylglycerols are esters of glycerol and long chain carboxylic acids.
- C. Long chain carboxylic acids are also known as fatty acids.
- D. The major acidic component of vinegar is formic acid. ✓

31. What is the name of triacylglycerol(triglycerides) that is solid at room temperature? Not Answered

- A. Lecithin
- B. Fat ✓
- C. Wax
- D. Oil

32. Which of the following is the most important type of solute-solvent interaction in a solution of n- butanol in water? Not Answered

- A. Dispersion
- B. Ion-dipole
- C. Dipole-dipole
- D. Hydrogen bonding ✓

33. What is the product of the hydrolysis of esters in the presence of a mineral acid catalyst? Not Answered

- A. Alcohol ✓
- B. Carbon dioxide
- C. Ether
- D. Ketones

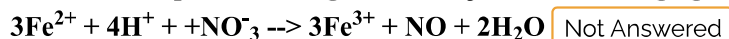
34. To which organic functional group does the following molecular representation, i.e, R_1R_2CHCOH belong? (R_1 and R_2 represent different alkyl chains) Not Answered

- A. Amides
- B. Aldehyde ✓
- C. Ethers
- D. Organic acid

35. What is the quantity of water, in mL, required to prepare 0.5 M of HCl from a concentrated solution of 3.5M in 50 mL is? Not Answered

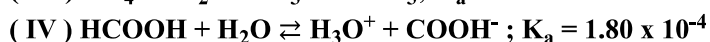
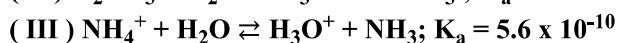
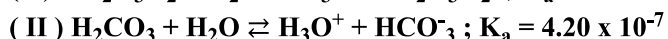
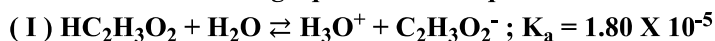
- A. 50mL
 B. 100mL
 C. 300mL ✓
 D. 350mL

36. What is the equivalent weight of HNO₃, as an oxidizing agent, in the following balanced reaction?



- A. 10.5
 B. 15.75
 C. 21.00 ✓
 D. 31.50


37. Given the following equilibria and equilibrium constant:



What is the strength of the acids in DECREASING order? Not Answered

- A. I, IV, II and III
 B. II, III, IV and I
 C. III, II, I and IV
 D. IV, I, II and III ✓

38. Given the reaction:



Which of the following represents a conjugate acid base pair? Not Answered

- A. H_2PO_4^- and H_2O
 B. H_2PO_4^- and HPO_4^{2-} ✓
 C. H_2PO_4^- and H_3O^+
 D. H_2O and $\text{H}_2\text{PO}_4^{2-}$

39. Which of the following statements is TRUE about colligative properties? Not Answered

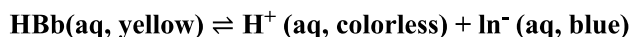
- A. Both vapour pressure and freezing point increase when a non-volatile solute is added to a solvent.
 B. Both freezing point and boiling point increase when a non-volatile solute is added to a solvent.
 C. Both vapour pressure and boiling point decrease when a non-volatile solute is added to a solvent.
 D. Colligative properties depend only upon the number of solute particles in a solution and not upon their identity. ✓

40. What is the pH of 0.005 M solution of Ca(OH)₂? Not Answered

- A. 2.3

- B. 10
 C. 12 ✓
 D. 14

41. The indicator Bromthymol Blue (HBb) is a weak acid with $K_a = 1.0 \times 10^{-7}$ ionizes as follows:



Which way will the equilibrium shift when NaOH is added and what will the colour of the NaOH solution be containing this indicator? Not Answered

- A. Equilibrium will shift to the right and the colour of NaOH solution will turn green.
 B. Equilibrium will shift to the right and the colour of NaOH solution will turn blue.
 C. Equilibrium will shift to the left and the colour of NaOH solution will turn yellow. ✓
 D. Equilibrium will shift to the left and the colour of NaOH solution will turn blue.

42. How many kilo joules of heat are absorbed when 20 g of NaCl(s) is decomposed in to Na(s) and Cl₂(g) at constant pressure according to the following reaction?



- A. -281.0
 B. -140.5
 C. +140.5 ✓
 D. +281.0

43. In the electroplating of nickel from a solution containing Ni²⁺ ion, what will be the weight of the metal deposited on the cathode by a current of 8 A flowing for 500 minutes? Not Answered

- A. 73g ✓
 B. 103g
 C. 117.4g
 D. 145g

44. A 1M solution of Cu(NO₃)₂ is placed in a beaker with a strip of Cu metal. A 1M of SnSO₄ is placed in a second beaker with a strip of Sn metal. The two beakers are then connected by a salt bridge and the two metal electrodes are connected by wires to a voltmeter. Which of the following electrodes serves as the anode and which electrode gains mass?

Given that $E^0\text{Cu}^{2+}/\text{Cu} = 0.34\text{V}$ and $E^0\text{Sn}^{2+}/\text{Sn} = 0.14\text{V}$ Not Answered

- A. Anode, Sn, Sn electrode gains mass.
 B. Anode, Sn, Cu electrode gains mass. ✓
 C. Anode, Cu, Sn electrode gains mass.
 D. Anode, Cu, Cu electrode gains mass.

45. Which of the following metal alloys does NOT contain tin? Not Answered

- A. Brass ✓
 B. Bronze
 C. Pewter
 D. Plumber's solde

46. What structural feature is usually needed to present in order for an addition polymer to be produced?

Not Answered

- A. A carbon-carbon sigma bond.
- B. A carbon-oxygen pi bond.
- C. A carbon-oxygen sigma bond.
- D. A carbon-carbon pi bond. ✓

47. What are the raw materials required to synthesize nylon 6, 6, a specific kind of nylon?

Not Answered

- A. Diacids
- B. Diamines
- C. Diacids and diamines ✓
- D. Polyethylene

48. Which of the following substances are added to natural rubber to toughen it?

Not Answered

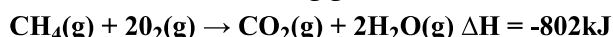
- A. Calcium
- B. Carbon
- C. Nitrogen
- D. Sulphur ✓

49. What is the quantity of heat required to raise the temperature of 80g of ethanol from 25°C to 75°C? (specific heat of ethanol = $2.46\text{Jg}^{-1}\text{K}^{-1}$)

Not Answered

- A. 2.46kJ
- B. 4.0kJ
- C. 9.84kJ ✓
- D. 18.68kJ

50. Consider the following gaseous reaction at 250C:



Which energy change would occur if 3.2 moles of CH_4 is completely combusted?

Not Answered

- A. $2.57 \times 10^3\text{kJ}$ will be released. ✓
- B. $2.57 \times 10^2\text{kJ}$ will be absorbed.
- C. $6.43 \times 10^3\text{kJ}$ will be released.
- D. $6.43 \times 10^3\text{kJ}$ will be absorbed.

51. What is the number of chloride ions (Cl^-) present in 1.0×10^{-5} mol of AlCl_3 ?

Not Answered

- A. 1.80×10^9 ✓
- B. 6.02×10^{18}
- C. 6.02×10^{23}
- D. 6.02×10^{28}

52. Which of the following is the most important ingredients used for production of DAP fertilizer?

Not Answered

- A. Ammonia and phosphoric acid. ✓
- B. Nitric acid, urea and phosphoric acid.
- C. Phosphoric acid, urea and ammonia.
- D. Sulphuric acid, ammonia and urea.

53. Which of the following bio molecules forms a zwitterions at higher or lower PH? Not Answered

- A. Cellulose
- B. Glucose
- C. Protein ✓
- D. Starch

54. Which of the following form of synthetic rubbers can be vulcanized to greatly enhance its mechanical strength? Not Answered

- A. Neoprene
- B. Isoprene
- C. Styrene-butadiene rubber ✓
- D. Butyl rubber

55. What is the range in the number of carbon atom of the monosaccharides that are found in nature?

Not Answered

- A. 3 to 7 ✓
- B. 4 to 10
- C. 4 to 12
- D. 5 to 12

56. What are the two principal polysaccharide forms of starch? Not Answered

- A. Aldohexose and ketopentose.
- B. Amylose and amylopectin ✓
- C. Maltose and cellobiose
- D. Sucrose and lactose.

57. What is the Kelvin scale (K) corresponding to the temperature readings when the degree Celsius ($^{\circ}\text{C}$) is identical to the degree Fahrenheit ($^{\circ}\text{F}$)? Not Answered

- A. 0 k
- B. 37 k
- C. 233 k ✓
- D. 273 k

58. What is the wavelength associated with an electron of mass, $m = 9.11 \times 10^{-28}\text{g}$, travelling at 40% of the velocity of light? Not Answered

- A. $6.06 \times 10^{-15}\text{m}$
- B. 2.42×10^{-15}

- C. $6.06 \times 10^{-12} \text{m}$ ✓
 D. $2.42 \times 10^{-11} \text{m}$

59. The quantum numbers listed below are meant for four different electrons in an atom:

- I. $n = 4, l = 0, m_l = 0, m_s = +1/2$
 II. $n = 3, l = 1, m_l = 1, m_s = +1/2$
 III. $n = 4, l = 2, m_l = 0, m_s = +1/2$
 IV. $n = 4, l = 1, m_l = 0, m_s = -1/2$

When these sets of quantum numbers are arranged in order of increasing energy, one may get:

Not Answered

- A. $I < II < III < IV$
 B. $I < III < II < IV$
 C. $II < I < IV < III$ ✓
 D. $IV < III < II < I$

60. Which of the following hybrid orbitals is favouring the formation of trigonal bipyramidal? Not Answered

- A. sp^3d ✓
 B. sp^3
 C. sp^3d^2
 D. sp^3d^3

61. Which one of the following molecules/molecular ions is paramagnetic according to the molecular orbital theory? Not Answered

- A. O_2^{2-}
 B. O_2 ✓
 C. F_2
 D. O_2^{2+}

62. For the reaction: $2A + B \rightarrow C$ the following experimental results were obtained:

Experiment	[A]	[B]	Rate ($\text{mol L}^{-1} \text{S}^{-1}$)
1	0.50	0.50	0.300
2	0.50	0.25	0.075
3	0.25	0.25	0.075

What is the value of the rate constant? Not Answered

- A. $0.6 \text{ mol L}^{-1} \text{S}^{-1}$
 B. $0.6 \text{ L}^{-1} \text{S}^{-1}$
 C. $1.2 \text{ L}^{-1} \text{S}^{-1}$ ✓
 D. $2.4 \text{ mol}^{-1} \text{S}^{-1}$

63. Increase in temperature of rate of a given reaction is due to the increase in the: Not Answered

- A. Extent of molecular dissociation.

- B. Activation energy of the reaction.
- C. Frequency of collision of the reaction species. ✓
- D. Numerical value of the rate constant of the reaction.

64. If a piece of aluminium (Al) foil measuring 24 cm by 31 cm has a mass of 10.35 g, (density of Al = 2.70 gm^{-3}). What is the thickness of the foil in millimetres? Not Answered

- A. 5.15×10^{-3}
- B. 5.15×10^{-2} ✓
- C. 3.833
- D. 744

65. What sizes of particles and velocities can one consider quantum effect? Not Answered

- A. Particles with very large mass and large velocities.
- B. Particles with large mass and small velocities.
- C. Particles with very small mass and large velocities.
- D. Particles with small mass and small velocities. ✓

66. Which of the following molecules has a dipole moment? Not Answered

- A. XeF_4
- B. H_2S ✓
- C. SO_3
- D. CH_4

67. The reaction for the formation of nitrosyl chloride

$2\text{NO}(\text{g}) + \text{Cl}_2(\text{g}) \rightleftharpoons 2\text{NOCl}(\text{g})$ was studied at 25°C . the value of K_p for this reaction at 25°C is $1.9 \times 10^3 \text{ atm}^{-1}$.

What is the value of K at 25°C ? Not Answered

- A. $1.9 \times 10^{-3} \text{ L/mol}$
- B. $3.8 \times 10^{-3} \text{ L/mol}$
- C. $4.6 \times 10^4 \text{ L/mol}$
- D. $4.6 \times 10^5 \text{ L/mol}$ ✓

68. Which of the following reactions will convert carboxylic acids to primary amines? Not Answered

- A. Decarboxylation with HBr and peroxide, then reaction of the alkyl bromide with ammonia.
- B. Reduction of the acid to the alcohol with NaOH/ formaldehyde then reaction with ammonium chloride and heat.
- C. A two-step conversion, first to the amide with ammonia and heat, and then by reduction with lithium aluminium hydride or hydrogen plus catalyst. ✓
- D. Lactase fermentation in the presence of ammonia atmosphere

69. A solution was prepared by adding 48g of methanol (CH_3OH) in to 81g of water (H_2O). What is the mole fraction of methanol in this solution? Not Answered

- A. 0.25 ✓

- B. 0.75
 C. 1.5
 D. 4.5

70. A solution was prepared by dissolving 3.75 g of pure hydrocarbon in 95.0g of cyclohexane. The boiling point of pure cyclohexane was observed to be 80.70°C and that of the solution was 81.45°C. What is the approximate molecular weight of the hydrocarbon? (K_b for cyclohexane = 2.79°C/m) Not Answered

- A. 71.0g/mol
 B. 105g/mol
 C. 147g/mol ✓
 D. 312g/mol

71. A 50mL solution of H_2SO_4 of 0.205 M is titrated with NaOH solution of unknown concentration. The endpoint against phenolphthalenin indicator was signalled when 41.0ml of NaOH was added. What is the concentration of NaOH solution? Not Answered

- A. 0.10M
 B. 0.25M ✓
 C. 0.4M
 D. 0.50M

72. To 0.2 M solution of a weak monoprotic acid, HA, enough quantity of its sodium salt, NaA, was dissolved to give a concentration of 0.2 M of the salt. What will be the acid concentration, $[H_3O^+]$, in the final solutions? (K_a of HA = 1.80×10^{-5}) Not Answered

- A. $3.60 \times 10^{-6}M$
 B. $1.00 \times 10^{-5}M$
 C. $1.80 \times 10^{-5}M$ ✓
 D. $1.90 \times 10^{-3}M$

73. Gaseous petrol in a combustion system has done 375kJ of work during its expansion in the piston. Simultaneously, it absorbed 586 kJ of heat from the engine. What is the internal energy change during the process? Not Answered

- A. +211kJ ✓
 B. +961kJ
 C. -211kJ
 D. -961kJ

74. Which of the following reactions is expected to have negative value of entropy change (ΔS)? Not Answered

- A. $C_6H_6(s) + 6O_2(g) \rightarrow 6CO_2(g) + 6H_2O(l)$
 B. $CaCO_3(s) \rightarrow CaO(s) + CO_2(g)$
 C. $N_2O_4(g) + Cl(g) \rightarrow 2NOCl(g) + O_2(g)$
 D. $2SO_2(g) + O_2(g) \rightarrow 2SO_3(g)$ ✓

75. Consider the following unbalanced redox reaction in acidic solution:

$\text{MnO}_4^- + \text{Fe}^{2+} \rightarrow \text{Mn}^{2+} + \text{Fe}^{3+}$ what is the change in oxidation state for both the substances oxidized and reduced, and the coefficients of Fe^{2+} and Mn^{2+} , respectively after balancing? Not Answered

- A. 2 and 7, and 2 and 5
- B. 3 and 2, and 5 and 1
- C. 1 and 5, and 5 and 1 ✓
- D. 2 and 5, and 5 and 2

76. How many mL conc. HNO_3 and how many mL of water are required to prepare 500mL of 0.1M HNO_3 from a conc. 13M HNO_3 ? Not Answered

- A. 1mL HNO_3 and 496.15 mL H_2O .
- B. 3mL HNO_3 and 500mL H_2O .
- C. 3.85 mL HNO_3 and 500mL H_2O .
- D. 3.85 mL HNO_3 and 496.15 mL H_2O . ✓

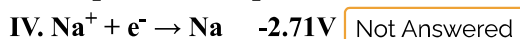
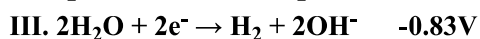
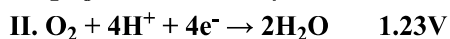
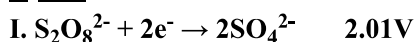
77. What is the pH of an aqueous solution prepared to contain $1.3 \times 10^{-3}\text{M}$ sodium nitrite (NaNO_2) if the acid dissociation equilibrium constant, K_a for nitrous acid (HNO_2) is 5.1×10^{-4} ?

$K_w = 1.0 \times 10^{-14}$ Not Answered

- A. 3.1
- B. 5.1
- C. 6.0
- D. 7.3 ✓

78. What reactions occur at the anode and cathode when an aqueous solution of Na_2SO_4 is electrolyzed?

E^0 red

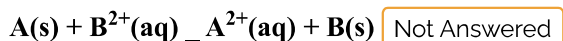


- A. H_2 at cathode and O_2 at anode. ✓
- B. Na at cathode and $\text{S}_2\text{O}_8^{2-}$ at anode.
- C. H_2 at cathode and $\text{S}_2\text{O}_8^{2-}$ at anode.
- D. Na at cathode and O_2 at anode.

79. Which synthetic polymer is produced from caprolactam? Not Answered

- A. Nylon -6 ✓
- B. Nylon 6, 10
- C. Teflon
- D. Terylene

80. For the following hypothetical equation, in aqueous solution, what is the correct representation of the cell notation?



- A. $A(s)|A^{2+}(aq)||B^{2+}(aq)|B(s)$ ✓
 B. $B^{2+}(aq)|B(s)||A^{2+}(aq)|A(s)$
 C. $A^{2+}(aq)(s)|A(s)||B(s)|B^{2+}(aq)$
 D. $B(s)|B^{2+}(aq)||A^{2+}(aq)|A(s)$

Your Answers

you have scored 0 out of 0

Answer Key

1.B	11.A	21.A	31.B	41.C	51.A	61.B	71.B
2.C	12.A	22.A	32.D	42.C	52.A	62.C	72.C
3.C	13.A	23.B	33.A	43.A	53.C	63.C	73.A
4.C	14.C	24.C	34.B	44.B	54.C	64.B	74.D
5.D	15.D	25.B	35.C	45.A	55.A	65.D	75.C
6.B	16.C	26.C	36.C	46.D	56.B	66.B	76.D
7.B	17.B	27.D	37.D	47.C	57.C	67.D	77.D
8.B	18.D	28.B	38.B	48.D	58.C	68.C	78.A
9.A	19.A	29.D	39.D	49.C	59.C	69.A	79.A
10.D	20.A	30.D	40.C	50.A	60.A	70.C	80.A

[Retake Exam \(exam.php?subject=Chemistry&year=2005\)](#)