

NATIONAL EDUCATIONAL ASSESMENT AND EXAMINATIONS AGENCY (NEAEA)  
ETHIOPIAN UNIVERSITY ENTRANCE EXAMINATION (EUEE)  
CHEMISTRY EXAMINATION 2008

BOOKLET CODE: 00

NUMBER OF ITEMS:

SUBJECT CODE: 00

TIME ALLOWED: 00

**PHYSICAL CONSTANTS:**

Avogadro's No. =  $6.023 \times 10^{23} \text{ mol}^{-1}$

Plank's constant,  $h = 6.626 \times 10^{-34} \text{ Js}^{-1}$

Rydberg's constant,  $R_H = 109,678 \text{ cm}^{-1}$

Velocity of light,  $c = 3 \times 10^8 \text{ ms}^{-1}$

Mass of electron =  $9.11 \times 10^{-31} \text{ kg}$

Faraday's constant (F) = 96,500 coulombs/mol

Universal gas constant,  $R = 8.31 \text{ J/mole.K}$

1Cal = 4.184J

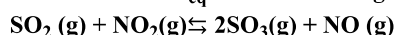
Atomic Numbers (Z) and Atomic Weights (A)

Element	H	He	Li	B	C	N	O	F	Ne	S	Cl			
Z	1	3	4	5	6	7	8	9	11	12	14	15	15	17
A	1.0	6.9	9.0	10.8	12.0	14.0	16.0	19.0	23.0	24.3	28.1	31.0	32.1	35.5
Element	Ar	Ca	Cr	Mn	Fe	Ni	Cu	Zn	As	Kr	I	xe		
Z	18	20	24	25	26	28	29	30	33	36	53	54		
A	39.95	40.08	52	54.9	55.9	58.71	63.5	65.4	75.0	83.8	126.9	131.3		

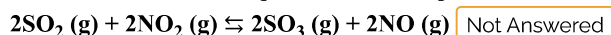
1. A drug decomposes by zero-order kinetics with a rate constant of  $2 \text{ mgmL}^{-1} \text{ month}^{-1}$ . If the initial concentration is  $100 \text{ mgmL}^{-1}$ , how long will it take for the drug to decompose by 10%? Not Answered

- A. 2 months  
 B. 3 months  
 C. 5 months ✓  
 D. 4 months

2. The value of  $K_{eq}$  for the following reaction is 0.25.



What is the value of  $K_{eq}$  at the same temperature for the reaction below?



- A. 0.25  
 B. 0.062 ✓  
 C. 0.50  
 D. 16

3. Which of the following would react to form pentyl ethanoate? Not Answered

- A. 1- propanol and pentanoic acid  
 B. Ethanol and pentanoic acid

- C. 1- pentanol and ethanoic acid ✓  
 D. Ethanol and ethanoic acid

4. Which of the following is correct when 34495 is rounded to three significant figures? Not Answered

- A. 345  
 B. 34500 ✓  
 C. 344  
 D. 3840

5. What is the first step of the scientific method? Not Answered

- A. Making observations ✓  
 B. Forming a hypothesis  
 C. Performing an experiment  
 D. Predicting the result of an experiment

6. Which of the following are not electromagnetic waves? Not Answered

- A. Infrared waves  
 B. Gamma waves ✓  
 C. Radio waves  
 D. Sound waves

7. What is the distance that a radio wave will travel in 0.250sec? Not Answered

- A.  $1.2 \times 10^7$ m  
 B.  $12 \times 10^7$ m  
 C.  $7.5 \times 10^7$ m ✓  
 D.  $5.6 \times 10^7$ m

8. Which of the following is not a form of chemical bonding? Not Answered

- A. Covalent bonding  
 B. Metallic bonding  
 C. Ionic bonding  
 D. Hydrogen bonding ✓

9. Which of the following statements is not true about covalent bonding? Not Answered

- A. Covalent compounds are least likely to be formed between atoms of the same elements.  
 B. Covalent bonds are least likely to be formed between atoms of different elements on the right side of the periodic table. ✓  
 C. Covalent bonds are least likely to be formed between an element in Group I and an element in Group VII.  
 D. Covalent bonds are least likely to be formed by head of the group elements with high ionization energies.

10. If we increase the concentration of a reactant, what happens to the collision between particles? Not Answered

- A. There are more collisions. ✓  
 B. There are fewer collisions.  
 C. There are the same number of collisions, but they have less energy  
 D. There are the same number of collisions, but they have more energy

11. How many moles of  $\text{NH}_4\text{Cl}$  must be added to 1.5L of 0.2M solution of  $\text{NH}_3$  to form a buffer whose PH is 9.0 ( $K_b = 1.8 \times 10^{-5}$ )?

Not Answered

- A. 0.36
- B. 0.65
- C. 0.54
- D. 0.45 ✓

12. What mass of magnesium is plated out upon electrolysis from molten  $\text{MgCl}_2$  using a current of 60A for a period of 4000 seconds? Not Answered

- A. 30gm ✓
- B. 24gm
- C. 60gm
- D. 72gm

13. For a voltaic (or galvanic) cell using  $\text{Ag}, \text{Ag}^+$  (1.0M) and  $\text{Zn}, \text{Zn}^{2+}$  (1.0M) half cells, which of the following statements is incorrect? Not Answered

- A. The zinc electrode is the Anode.
- B. The electrons will flow through the external circuit from the zinc electrode to the silver electrode.
- C. The mass of the zinc electrode will decrease as the cell operates.
- D. Reduction occurs at the zinc electrode as the cell operates. ✓

14. The difference between fats and oils is that Not Answered

- A. Oils are liquid at room temperature. ✓
- B. Oils have more calories
- C. Oils are sold at room temperature.
- D. Fats are liquid at room temperature.

15. What kind of solution forms when gasoline evaporates in air? Not Answered

- A. Gas in gas solution ✓
- B. Gas in liquid solution
- C. Liquid in liquid solution
- D. Liquid in gas solution

16. What is the solvent in 70% alcohol solution? Not Answered

- A. Water
- B. Alcohol ✓
- C. Sugar
- D. Kerosene

17. How many moles of  $\text{H}_2\text{SO}_4$  are needed to prepare 5.0 liters of a 2.0M solution of  $\text{H}_2\text{SO}_4$ ? Not Answered

- A. 2.5
- B. 5
- C. 20
- D. 10 ✓

18. What is the balanced net ionic equation for the reaction of  $\text{CaCl}_2$  and  $\text{AgNO}_3$ ? Not Answered

- A.  $\text{CaCl}_2(\text{aq}) + 2\text{AgNO}_3(\text{aq}) \rightarrow 2(\text{NO}_3)_2(\text{aq}) + 2\text{AgCl}(\text{s})$
- B.  $\text{Ca}^{2+}(\text{aq}) + 2\text{Cl}^-(\text{aq}) + 2\text{NO}_3^-(\text{aq}) \rightarrow \text{Ca}^{2+}(\text{aq}) + 2\text{NO}_3^- + 2\text{AgCl}(\text{s})$
- C.  $\text{Cl}^-(\text{aq}) + \text{Ag}^+(\text{aq}) \rightarrow 2\text{AgCl}(\text{s})$

D.  $2\text{Cl}^- (\text{aq}) + 2\text{Ag}^+ (\text{aq}) \rightarrow 2\text{AgCl} (\text{s})$  ✓

19. The  $K_a$  of Hypochlorous acid (HClO) is  $3.0 \times 10^{-4}$  at  $25^\circ\text{C}$ . What is the % ionization of hypochlorous acid in a 0.015M aqueous solution of HClO at  $25^\circ\text{C}$ ? Not Answered

- A.  $2.1 \times 10^{-5}$
- B. 0.14 ✓
- C.  $1.4 \times 10^{-3}$
- D.  $3.3 \times 10^{-3}$

20. Which of the following combinations cannot produce a buffer solution? Not Answered

- A.  $\text{HClO}_4$  and  $\text{NaClO}_4$  ✓
- B. HCN and NaCN
- C.  $\text{HNO}_2$  and  $\text{NaNO}_2$
- D.  $\text{NH}_3$  and  $(\text{NH}_4)_2\text{SO}_4$

21. What is the molality of a solution that contains 51.2gm of naphthalene,  $\text{C}_{10}\text{H}_8$  in 500ml of carbon tetrachloride? The density of  $\text{CCl}_4$  is 1.60gm/ml Not Answered

- A. 0.750m
- B. 0.500m ✓
- C. 0.84m
- D. 1.69m

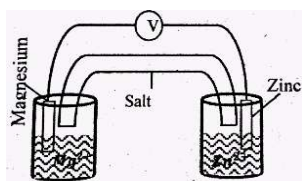
22. What is the ionization constant for a weak acid, Ha, that is 1.60% ionized in 0.0950M solution? Not Answered

- A.  $2.69 \times 10^{-3}$
- B.  $3.77 \times 10^{-2}$
- C.  $2.47 \times 10^{-5}$  ✓
- D.  $9.91 \times 10^{-6}$

23. Which of the following is correct? Not Answered

- A.  $1\text{pa} = 10\text{Nm}^2$
- B.  $1\text{N} = 10\text{Kg}$
- C.  $0.00072 = 7.2 \times 10^{-3}$
- D.  $1\text{L} = 1\text{dm}^3$  ✓

24. For the Galvanic cell shown below, which one of the following statement is correct? Not Answered



- A. At the zinc electrode, zinc ions are formed.
- B. The electrode potential is measured by the voltmeter. ✓
- C. The following reaction takes place at the magnesium electrode  $\text{Mg}^{2+} + 2\text{e}^- \rightarrow \text{Mg}$ .
- D. Electrons flow from the zinc electrode to the magnesium electrode.

25. What is the most common Ore used for the extraction of copper? Not Answered

- A. CuO
- B.  $\text{CuSO}_4$

- C.  $\text{CuCO}_3$   
 D.  $\text{CuFeS}_2$  ✓

26. Which of the following materials has the maximum ductility? Not Answered

- A. Nickel  
 B. Aluminium ✓  
 C. Mild steel  
 D. Copper

27. Which of the following statements about polyvinyl chloride is not correct? Not Answered

- A. Pvc can be used in making water pipes  
 B. Pvc is stiff  
 C. Pvc is softened on heating  
 D. The monomer of Pvc is  $\text{CHCl}=\text{CHCl}$  ✓

28. Which of the following is a natural polymer? Not Answered

- A. Keratin  
 B. Polythene  
 C. Cellulose ✓  
 D. Polymethyl methacrylate

29. Which of the following does not affect the solubility of a gas dissolved in a liquid? Not Answered

- A. Nature of solute and solvent  
 B. Pressure  
 C. Temperature ✓  
 D. Rate at which the gas dissolves

30. When a small amount of crystal solute is added to the super saturated solution, the solute crystals will Not Answered

- A. Grow bigger  
 B. Slightly dissolve  
 C. Remain unchanged  
 D. Dissolved completely ✓

31. Which of the following electrons, identified only by their  $n$  and  $l$  quantum numbers have the highest energy?

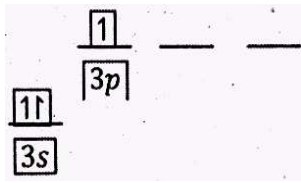
$n=3, l=0$   $n=4, l=1$   $n=3, l=2$   $n=4, l=2$  Not Answered

- A.  $n = 3, l = 2$   
 B.  $n = 4, l = 1$   
 C.  $n = 4, l = 2$  ✓  
 D.  $n = 3, l = 0$

32. What is the maximum number of unpaired electron in a d subshell? Not Answered

- A. 2  
 B. 5 ✓  
 C. 3  
 D. 4

33. The following energy level diagram represents the out most shell of what ground state element? Not Answered



- A. B  
 B. He  
 C. Al ✓  
 D. Be

34. Which of the following represents a tentative explanation of a certain scientific law? Not Answered

- A. Hypothesis  
 B. Observation  
 C. Explanation  
 D. Theory ✓

35. In order to advance the level of a theory, a hypothesis should: Not Answered

- A. Be obviously accepted by most people.  
 B. Be repeatedly confirmed by experimentation. ✓  
 C. Be a fully functional experiment.  
 D. Report the past experience.

36. Which of the following types of rays combine to form atoms of Helium? Not Answered

- A. Gamma ( $\gamma$ ) rays  
 B. Beta ( $\beta$ )  
 C. Alpha ( $\alpha$ ) ✓  
 D. X-rays

37. What is the relationship between frequency ( $\nu$ ), wavelength ( $\lambda$ ) and the speed of light ( $c$ )? Not Answered

- A.  $\lambda/\nu = c$   
 B.  $\nu c = \lambda$   
 C.  $hc/\lambda = \nu$   
 D.  $c = \nu\lambda$  ✓

38. What is the magnitude of quantum energy and the frequency for an object whose wave length is  $0.6 \times 10^{-6} \text{m}$ ? Not Answered

- A.  $3.31 \times 10^{-9} \text{J}$ ,  $5 \times 10^{14} \text{s}^{-1}$  ✓  
 B.  $3.98 \times 10^{-40} \text{J}$ ,  $2 \times 10^{-15} \text{s}^{-1}$   
 C.  $1.99 \times 10^{-25} \text{J}$ ,  $3.98 \times 10^{-40} \text{s}^{-1}$   
 D.  $9.94 \times 10^{-12} \text{J}$ ,  $1.99 \times 10^{-25} \text{sec}$

39. What new concept did Bohr adapt and use to formulate his made of the atom? Not Answered

- A. Electromagnetic theory developed by Maxwell.  
 B. The quantum concept developed by plank ✓  
 C. Phoelectric theory developed by Thompson  
 D. Newtron theory developed by Chadwick.

40. What values of  $l$  are permitted for an electron with  $n = 4$ ? Not Answered

- A. 1, 2, 3

- B. 1, 2, 3, 4
- C. 0, 1, 2, 3, 4
- D. 0, 1, 2, 3 ✓

41. What would happen to the oxygen molecule upon ionization to  $O_2^{+}$ ? Not Answered

- A. The bond length will increase and the bond energy will increase.
- B. The bond length will increase and the bond energy will decrease.
- C. The bond length will decrease and the bond energy will increase. ✓
- D. The bond length will decrease and the bond energy will decrease.

42. For a first order reaction, a plot of \_\_\_\_\_ versus \_\_\_\_\_ is linear. Not Answered

- A.  $1/[A]_t$ , t
- B.  $\ln 1/[A]_t$ , t
- C.  $[A]_t$ , t
- D.  $\ln [A]_t$ , t ✓

43. The rate law of the overall reaction  $A + B \rightarrow C$  is  $\text{rate} = K [A]^2$  which of the following will not increase the rate of the reaction? Not Answered

- A. Increasing the concentration of reactant A.
- B. Increasing the concentration of reactant B. ✓
- C. Increasing the temperature of the reaction.
- D. Adding a catalyst for the reaction.

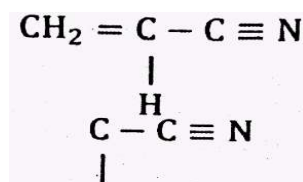
44. How many bonding pairs and lone pairs, respectively does the ion  $ICl_4^-$  have? Not Answered

- A. 3, 2
- B. 4, 2 ✓
- C. 5, 1
- D. 4, 1

45. Which of the following molecule does not have a tetrahedral central atom? Not Answered

- A.  $SF_4$  ✓
- B.  $AlH_4^-$
- C.  $BF_4^-$
- D.  $SiCl_4$

46. Acrylonitrile has the following Lewis structure with the designation of x, y and z for each carbon atom. What will be the value of the bond angle and geometry of Not Answered



- A. 109°, tetrahedral
- B. 120°, trigonal pyramidal
- C. 180°, linear ✓
- D. 90°, T-shape

47. Antimony (Sb) is a group v element, what will be the molecular geometry and number of lone pair electrons, respectively that exists in the ion  $[SbCl_5]^{2-}$ ? Not Answered

- A. Seesaw, 1
- B. Square pyramid, 2 ✓
- C. Seesaw, 2
- D. Linear, 3

48. Which of the following molecules does not have a trigonal bipyramidal electron-pair geometry? Not Answered

- A. SF<sub>4</sub>
- B. ClF<sub>3</sub>
- C. XeF<sub>2</sub>
- D. BrF<sub>5</sub> ✓

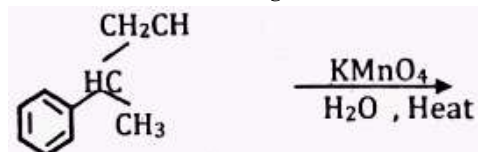
49. How many atomic orbitals are required for an sp<sup>3</sup> hybridization? Not Answered

- A. 2
- B. 6
- C. 4 ✓
- D. 8

50. Formic acid, which is released by ants, has a molecular formula of HCOOH. What are the possible hybridizations that exist in the molecule? Not Answered

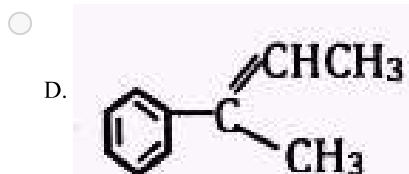
- A. Sp<sup>2</sup> and sp<sup>3</sup> ✓
- B. Sp and sp<sup>3</sup>
- C. Sp, sp<sup>2</sup> and sp<sup>3</sup>
- D. Sp and sp<sup>2</sup>

51. Consider the following reaction: What will be the main product of the reaction above?



Not Answered

- A.
- B.
- C.



52. Which of the following statements concerning the carbonyl group in aldehydes and ketones is not true? Not Answered

- A. The bond is polar, with a slight negative charge on the oxygen atom.
- B. The bond angles about the central carbon atom are  $120^\circ$ .
- C. In condensed form, the carbonyl group can be written as CHO. ✓
- D. The bond is polar. Therefore, carbonyl groups readily form hydrogen bonds with each other.

53. Which of the following statements concerning fats and oils is incorrect? Not Answered

- A. They are also called triacylglycerols.
- B. They are also called triglycerides.
- C. They are fatty acid salts. ✓
- D. They are glycerol trimesters.

54. Which of the following statement(s) is (are) applicable to a balanced chemical equation of an elementary reaction?

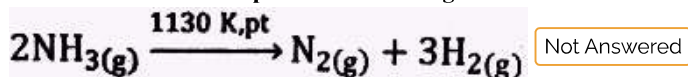
- I. Order is same as molecularity.
- II. Order is less than the molecularity.
- III. Order is greater than the molecularity.
- IV. Molecularity can never be zero.

Not Answered

- A. I
- B. I, II
- C. I, IV ✓
- D. I, III

55. At high pressure, the following reaction is zero order, Which of the following options is (are) correct for this reaction?

- I. Rate of reaction = rate constant.
- II. Rate of reaction depends on the concentration of ammonia.
- III. Rate of decomposition of ammonia remains constant until ammonia decomposes completely.
- IV. Further increase in pressure will change the rate is reaction.



- A. I ✓
- B. I, III, IV
- C. I, II
- D. I, II, IV

56. Which of the following expressions is correct for the rate of reaction given below?



- A.  $\frac{\Delta[\text{Br}^-]}{\Delta t} = \frac{5[\Delta H]}{\Delta t}$
- B.  $\frac{\Delta[\text{Br}^-]}{\Delta t} = 5/6 \frac{\Delta H}{\Delta t}$  ✓
- C.  $\frac{\Delta[\text{Br}^-]}{\Delta t} = 6/5 \frac{\Delta H}{\Delta t}$

D.  $\frac{\Delta[Br]}{\Delta t} = 6 \frac{\Delta H}{\Delta t}$

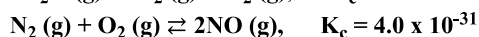
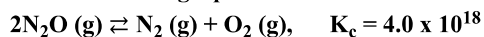
57. Rate law for the reaction  $A + 2B \rightarrow C$  is found to be

$$\text{Rate} = k[A][B]$$

If the concentration of reactant 'B' is doubled, keeping the concentration of 'A' constant, what will be the value of the rate constant?

- A. The same  
 B. Halved  
 C. Quadrupled  
 D. Doubled ✓

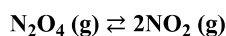
58. The following equilibrium constants were determined at 300°C.



What will be the equilibrium constant at 300°C for the gaseous reaction of  $2N_2O(g) + O_2(g) \rightleftharpoons 4NO(g)$ ?

- A.  $3.2 \times 10^{-12}$   
 B.  $6.4 \times 10^{45}$  ✓  
 C.  $5.0 \times 10^{50}$   
 D.  $1.6 \times 10^{-49}$

59. When 0.50 mol of  $N_2O_4$  is placed in a 4.0 liter reaction vessel and heated to 400k, 80% of the  $N_2O_4$  decomposes to  $NO_2$  gas as follows:



What will be the value of  $K_p$ , in units of pressure, at 400k for this reaction?

- A. 2.62  
 B. 13.12 ✓  
 C. 50.48  
 D. 16.2

60. Which of the following is not true about carbonyl compounds?

- A. Carbonyl compounds contain  $3\sigma$  - bond and  $1\pi$  - bond.  
 B. The carbon oxygen bond is both longer and weaker. ✓  
 C. The bond angle in carbonyl is about  $120^\circ$ .  
 D. Carbonyl compounds may be hydrolysed.

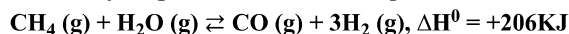
61. Sodium acetate spontaneously crystallizes out of a supersaturated solution on standing. Which of the following is true for the thermodynamic quantities of this system for such a process?

- A.  $\Delta S < 0, \Delta H < 0$  ✓  
 B.  $\Delta G < 0, \Delta H > 0$   
 C.  $\Delta S > 0, \Delta G < 0$   
 D.  $\Delta S > 0, \Delta H > 0$

62. In which of the following systems will the position of equilibrium shift to the left upon an increase in pressure, but to the right upon an increase in temperature?

- A.  $CO_2(g) + H_2(g) \rightleftharpoons CO(g) + H_2O(g), \Delta H > 0$ .  
 B.  $C_2H_4(g) + H_2O(g) \rightleftharpoons C_2H_5OH(g), \Delta H < 0$ .  
 C.  $C_2H_6(g) \rightleftharpoons C_2H_4(g) + H_2(g), \Delta H > 0$ . ✓  
 D.  $2SO_2(g) + O_2(g) \rightleftharpoons 2SO_3(g), \Delta H > 0$ .

63. The hydrogen used in the Haber process is made by the following reaction



Which of the following sets of conditions will favour the formation of  $\text{H}_2$ ? Not Answered

- A. Low pressure and high temperature. ✓
- B. Low pressure and low temperature.
- C. High pressure and low temperature.
- D. High pressure and high temperature.

64. Which of the following types of compounds are expected products from the saponification of a fat? Not Answered

- A. Glycerol and fatty acid salts. ✓
- B. Glycerol and fatty acids.
- C. Fatty acid salts and fatty acids.
- D. Glycerol, fatty acid salts and fatty acids.

65. Which one of the following statements best describes the standard enthalpy of formation of any element? Not Answered

- A. The value of  $\Delta H_f^\circ$  (element) depends on temperature.
- B. The value of  $\Delta H_f^\circ$  (element) is zero for any element in the standard state. ✓
- C. The value of  $\Delta H_f^\circ$  (element) is zero only for elements in the solid state.
- D. The value of  $\Delta H_f^\circ$  (element) is zero only at absolute zero temperature.

66. Equal masses of He and Ne are placed in a sealed container. What is the partial pressure of Ne, if the total pressure is 6 atm?

Not Answered

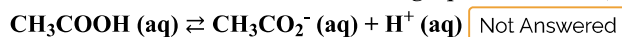
- A. 2
- B. 3
- C. 1 ✓
- D. 5

67. What is the molarity of a solution made by dissolving 10g of glucose ( $\text{C}_2\text{H}_{12}\text{O}_6$ ) in sufficient water to form 200ml solution?

Not Answered

- A. 0.18
- B. 0.251
- C. 0.362
- D. 0.278 ✓

68. In which direction will the following equilibrium shift, if a solution of  $\text{CH}_3\text{CO}_2\text{Na}$  is added?



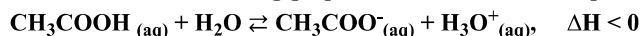
- A. The equilibrium shift to the right (more products).
- B. No change
- C. The equilibrium shifts to the left (more reactant) ✓
- D. Cannot be predicted.

69. A 1.0M solution a weak acid is found to dissociate by only 1.37%. Which of the following acid is it likely to be?

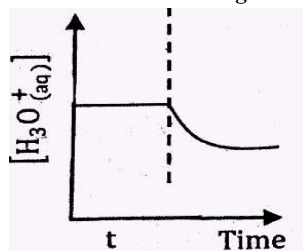
Not Answered

- A. HF  $K_a = 7.2 \times 10^{-4}$
- B.  $\text{HNO}_2$   $K_a = 7.2 \times 10^{-4}$
- C.  $\text{CH}_3\text{COOH}$   $K_a = 1.8 \times 10^{-5}$
- D.  $\text{HCOOH}$   $K_a = 1.9 \times 10^{-4}$  ✓

70. Consider the following graph, which relates to the equilibrium system:



Which of the following actions caused the change in the concentration of  $[\text{H}_3\text{O}^+_{(\text{aq})}]$  at time  $t$ ?



Not Answered

- A. Addition of  $\text{CH}_3\text{COO}^-_{(\text{aq})}$  ✓
- B. Addition of HCl
- C. Decreasing of temperature.
- D. Increasing the volume of the container.

71. A  $1.0 \times 10^{-4}\text{M}$  solution has a PH of 10.00. The solution is a Not Answered

- A. Weak acid
- B. Weak base
- C. Strong base ✓
- D. Strong acid

72. The four most abundant metals in the earth's crust decreasing order of abundance are: Not Answered

- A. Oxygen, Silicon, Aluminium and Iron. ✓
- B. Aluminium, Iron, Calcium and Magnesium.
- C. Iron, Aluminium, Silicon and Oxygen.
- D. Silicon, Aluminium, magnesium and Sodium.

73. A polysaccharide is a polymer made up of which kind of monomers? Not Answered

- A. Amino acids
- B. Nucleotides
- C. Simple sugars ✓
- D. Alternating sugar and phosphate groups.

74. What is the molar solubility of  $\text{Fe}(\text{OH})_3$  in a solution that is buffered at PH = 3.50 at  $25^\circ\text{C}$ ?  $K_{\text{sp}}(\text{Fe}(\text{OH})_3) = 4 \times 10^{-38}$

Not Answered

- A.  $4.0 \times 10^{-65}$  ✓
- B.  $1.1 \times 10^{-6}$
- C.  $2.0 \times 10^{-6}$
- D.  $1.26 \times 10^{-6}$

75. What is the purpose of a salt bridge in an electrochemical cell? Not Answered

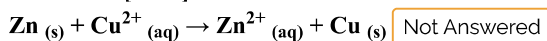
- A. To provide a source of ions to react at the anode and cathode.
- B. To maintain electrical neutrality in the half-cell through migration of ions. ✓
- C. To provide means of electrons to travel from the cathode to the anode.
- D. To provide means of electrons to travel from the anode to the cathode.

76. What is galvanized iron? Not Answered

- A. Iron that is coated with tin.

- B. Iron that is coated with zinc. ✓
- C. Iron that is coated with chromium.
- D. Iron that is coated with aluminium.

77. The standard cell potential ( $E^0$ ) for the reaction below is 1.10v. What is the cell potential for this reaction when  $[Cu^{2+}] = 1 \times 10^{-5}M$  and  $[Zn^{2+}] = 1M$ ?



- A. 1.1
- B. 0.95 ✓
- C. 1.2
- D. 1.35

78. Which of the following statements is true? Not Answered

- A. The more positive the value of  $E_{red}^0$ , the greater the driving force for reduction. ✓
- B. The more exothermic the value of  $E_{red}^0$ , the greater the driving force for reduction.
- C. The more endothermic the value of  $E_{red}^0$ , the greater the driving force for reduction.
- D. The more negative the value of  $E_{red}^0$ , the greater the driving force for reduction.

79. Which of the following types of elements are good oxidizing agents? Not Answered

- A. Alkali metals
- B. Halogens ✓
- C. Lanthanides
- D. Transition elements

80. Which of the following statements concerning petroleum is Not correct? Not Correct

- A. It is a renewable energy source. ✓
- B. It is a fossil fuel.
- C. It is a mixture consisting mainly of hydrocarbons.
- D. It was formed from marine organisms, which died millions of years ago. ✘


## Your Answers

80. D ✘

you have scored 0 out of 1

## Answer Key

1.C	11.D	21.B	31.C	41.C	51.	61.A	71.C
2.B	12.A	22.C	32.B	42.D	52.C	62.C	72.A
3.C	13.D	23.D	33.C	43.B	53.C	63.A	73.C
4.B	14.A	24.B	34.D	44.B	54.C	64.A	74.A
5.A	15.A	25.D	35.B	45.A	55.A	65.B	75.B
6.B	16.B	26.B	36.C	46.C	56.B	66.C	76.B
7.C	17.D	27.D	37.D	47.B	57.D	67.D	77.B
8.D	18.D	28.C	38.A	48.D	58.B	68.C	78.A
9.B	19.B	29.C	39.B	49.C	59.B	69.D	79.B
10.A	20.A	30.D	40.D	50.A	60.B	70.A	80.A

 Retake Exam (<exam.php?subject=Chemistry&year=2008>)

© 2019 Camara Education Ethiopia. Ethiopian General Secondary Education Certificate and University Entrance Examinations

Source: Ethiopian National Examinations Agency